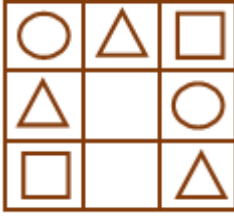
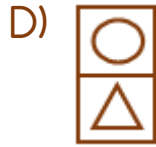
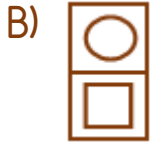
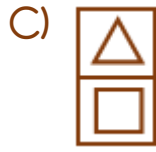
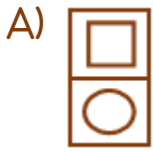


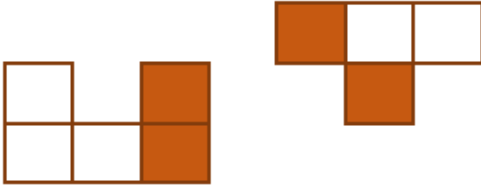
1)



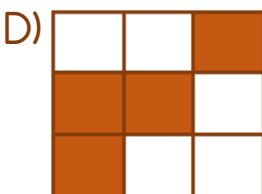
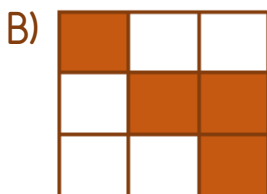
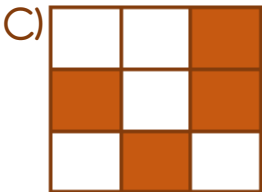
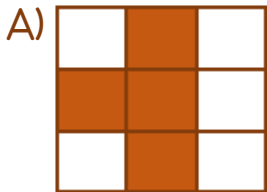
Yukarıdaki karede eksik bırakılan yere hangisi gelmelidir?



2)



Yukarıdaki şekillerin birleşmesi sonucunda nasıl bir şekil oluşur?



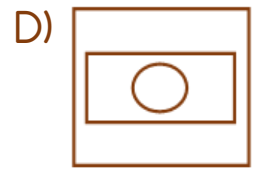
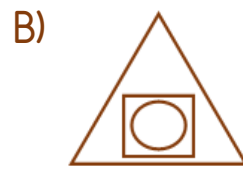
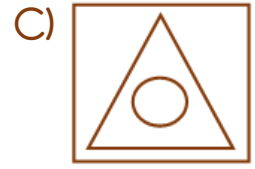
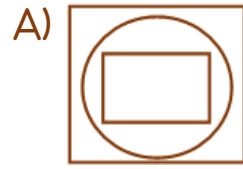
3)

★ En dışta kare vardır.

★ Üçgen yoktur.

★ En içte çember vardır.

Yukarıda özellikleri verilen şekil hangisidir?

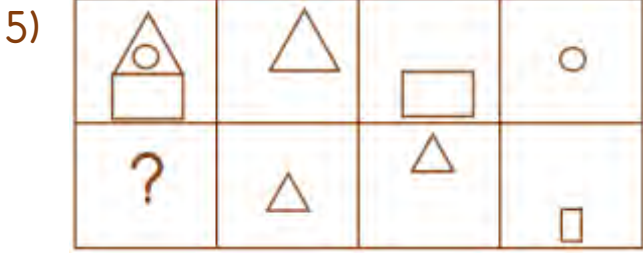


4)

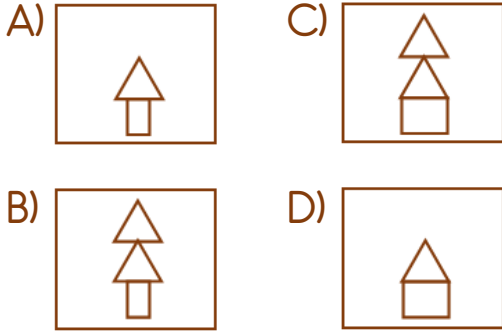


Yıldız 2 kare aşağı, 1 kare sağa ve 2 kare yukarı götürüldüğünde hangi şeklin üzerine gelir?

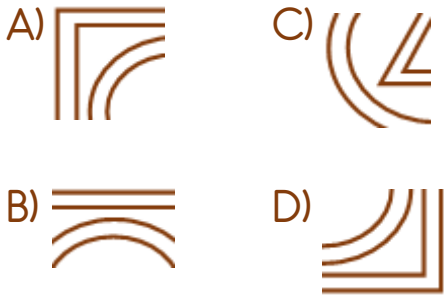
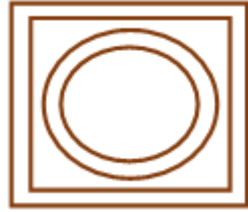




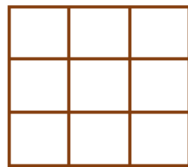
Yukarıdaki karelerde soru işaretinin yerine hangisi gelmelidir?



6) Hangisi yandaki şeklin bir parçası değildir?



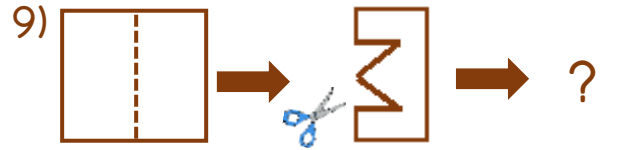
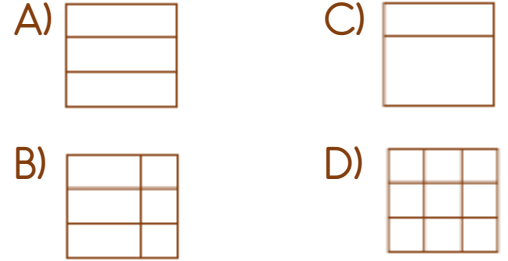
7) Yandaki şekilde kaç tane kare vardır?



A) 9 B) 10 C) 14 D) 18

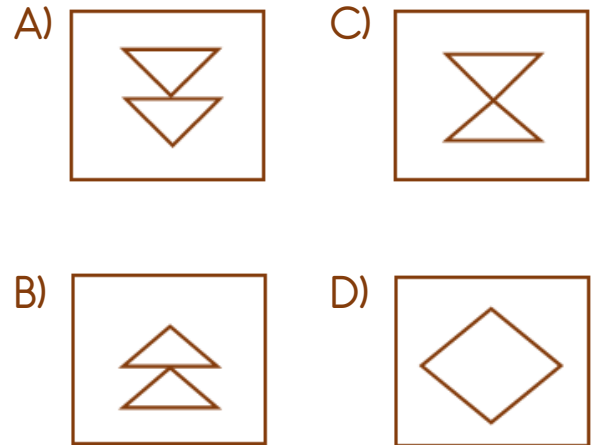


Soru işaretinin yerine hangi şekil gelmelidir?



Yukarıdaki kare kâğıt 1. görseldeki noktalı yerden tam ikiye katlanıyor. Makas ile 2. görseldeki gibi 'M' harfi şeklinde kesiliyor.

Kâğıt tekrar açıldığında görüntüsü nasıl olur?



Cevap Anahtarı

1-A 2-B 3-D 4-A 5-B 6-C 7-C 8-D 9-C