



 Aşağıdaki çıkarma işlemlerini yapalım. Cevabı aynı olanları aynı renge boyayalım.



$$\begin{array}{r} 232 \\ - 200 \\ \hline \end{array}$$



$$\begin{array}{r} 945 \\ - 200 \\ \hline \end{array}$$



$$\begin{array}{r} 941 \\ - 100 \\ \hline \end{array}$$



$$\begin{array}{r} 925 \\ - 500 \\ \hline \end{array}$$




$$\begin{array}{r} 974 \\ - 400 \\ \hline \end{array}$$



$$\begin{array}{r} 994 \\ - 600 \\ \hline \end{array}$$

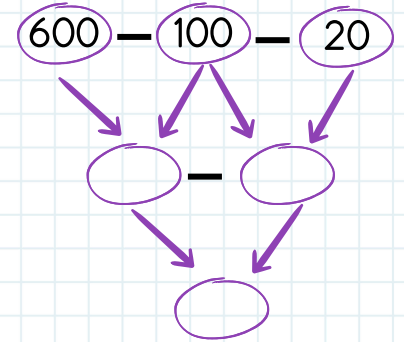
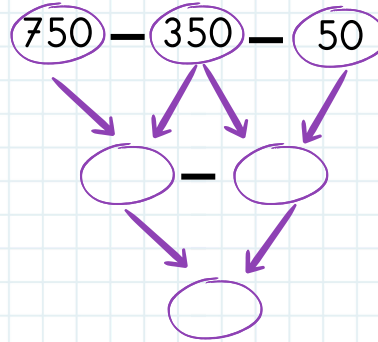
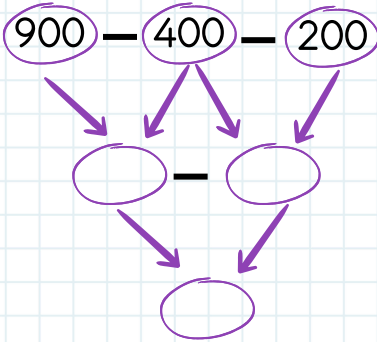
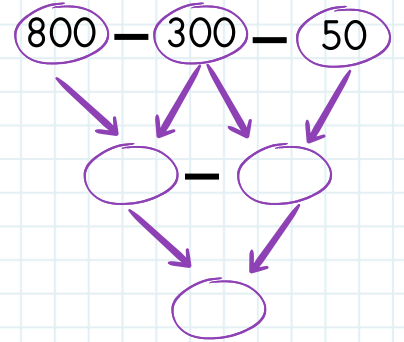
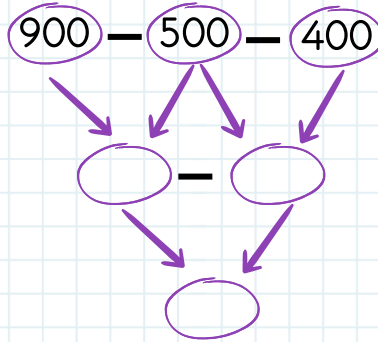
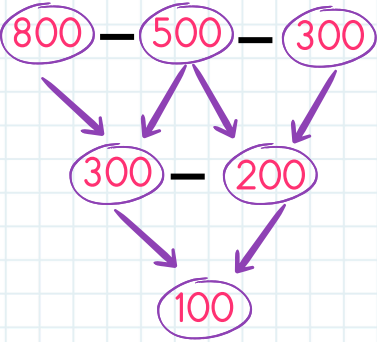


$$\begin{array}{r} 735 \\ - 300 \\ \hline \end{array}$$



$$\begin{array}{r} 702 \\ - 300 \\ \hline \end{array}$$

 Aşağıdaki çıkarma işlemlerini örnekteki gibi yapalım.



» Aşağıda verilen çıkarma işlemlerini zihinden yapalım.

1

$$\begin{array}{r} 950 \\ - 300 \\ \hline \end{array}$$

2

$$\begin{array}{r} 457 \\ - 200 \\ \hline \end{array}$$

3

$$\begin{array}{r} 590 \\ - 60 \\ \hline \end{array}$$

4

$$\begin{array}{r} 621 \\ - 400 \\ \hline \end{array}$$

5

$$\begin{array}{r} 875 \\ - 70 \\ \hline \end{array}$$

6

$$\begin{array}{r} 436 \\ - 90 \\ \hline \end{array}$$

7

$$\begin{array}{r} 887 \\ - 600 \\ \hline \end{array}$$

8

$$\begin{array}{r} 975 \\ - 500 \\ \hline \end{array}$$

9

$$\begin{array}{r} 803 \\ - 300 \\ \hline \end{array}$$

10

$$\begin{array}{r} 532 \\ - 80 \\ \hline \end{array}$$

11

$$\begin{array}{r} 725 \\ - 40 \\ \hline \end{array}$$

12

$$\begin{array}{r} 398 \\ - 200 \\ \hline \end{array}$$

13

$$\begin{array}{r} 624 \\ - 30 \\ \hline \end{array}$$

14

$$\begin{array}{r} 780 \\ - 600 \\ \hline \end{array}$$

15

$$\begin{array}{r} 298 \\ - 70 \\ \hline \end{array}$$

16

$$\begin{array}{r} 905 \\ - 800 \\ \hline \end{array}$$

17

$$\begin{array}{r} 589 \\ - 90 \\ \hline \end{array}$$

18

$$\begin{array}{r} 676 \\ - 80 \\ \hline \end{array}$$

19

$$\begin{array}{r} 979 \\ - 900 \\ \hline \end{array}$$

20

$$\begin{array}{r} 950 \\ - 60 \\ \hline \end{array}$$

» Aşağıda verilen çıkarma işlemlerini örnekteki verilen kurala göre yapınız.

$$565 - 300 = ?$$

Eksilen → 565 → 500 + 65

Çıkan → 300    300

Fark →                      200 + 65 = 265

$$912 - 600 = ?$$

Eksilen →          →         

Çıkan →                     

Fark →                      +          =         

$$654 - 300 = ?$$

Eksilen →          →         

Çıkan →                     

Fark →                      +          =         

$$489 - 200 = ?$$

Eksilen →          →         

Çıkan →                     

Fark →                      +          =         

$$746 - 500 = ?$$

Eksilen →          →         

Çıkan →                     

Fark →                      +          =         

$$619 - 400 = ?$$

Eksilen →          →         

Çıkan →                     

Fark →                      +          =         

$$882 - 700 = ?$$

Eksilen →          →         

Çıkan →                     

Fark →                      +          =         

$$945 - 500 = ?$$

Eksilen →          →         

Çıkan →                     

Fark →                      +          =