

 Aşağıda verilen çıkarma işlemlerinin sonucunu **zihinden** bulunuz.

$80 - 10 = \dots\dots$

$68 - 10 = \dots\dots$

$39 - 10 = \dots\dots$

$400 - 200 = \dots\dots$

$940 - 40 = \dots\dots$

$630 - 30 = \dots\dots$

$80 - 20 = \dots\dots$


$55 - 30 = \dots\dots$

$340 - 30 = \dots\dots$

$800 - 80 = \dots\dots$

$954 - 50 = \dots\dots$

$200 - 90 = \dots\dots$

 Aşağıda verilen çıkarma işlemlerinin sonucunu **zihinden** bulunuz.

$500 - 60 = \dots\dots$

$200 - 50 = \dots\dots$

$600 - 20 = \dots\dots$

$25 - 20 = \dots\dots$

$94 - 40 = \dots\dots$

$81 - 30 = \dots\dots$

$350 - 70 = \dots\dots$

$790 - 80 = \dots\dots$

$593 - 50 = \dots\dots$

$75 - 50 = \dots\dots$

$82 - 30 = \dots\dots$

$67 - 10 = \dots\dots$

$65 - 20 = \dots\dots$

$420 - 80 = \dots\dots$

$200 - 90 = \dots\dots$

$100 - 40 = \dots\dots$

$27 - 20 = \dots\dots$

$100 - 100 = \dots\dots$



Aşağıdaki çıkarma işlemlerini yapalım. Cevabı aynı olanları aynı renge boyayalım.



$$\begin{array}{r} 232 \\ - 200 \\ \hline \end{array}$$



$$\begin{array}{r} 945 \\ - 200 \\ \hline \end{array}$$



$$\begin{array}{r} 845 \\ - 100 \\ \hline \end{array}$$



$$\begin{array}{r} 925 \\ - 625 \\ \hline \end{array}$$




$$\begin{array}{r} 725 \\ - 400 \\ \hline \end{array}$$



$$\begin{array}{r} 832 \\ - 800 \\ \hline \end{array}$$



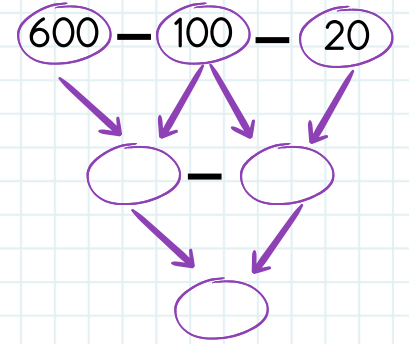
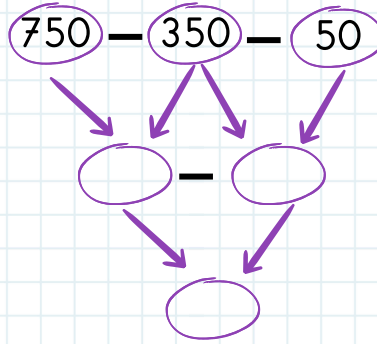
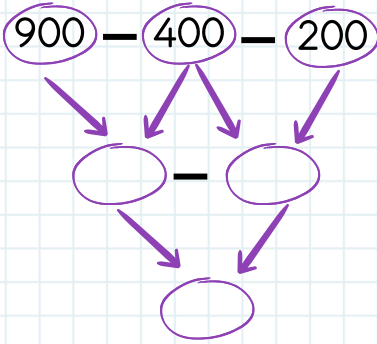
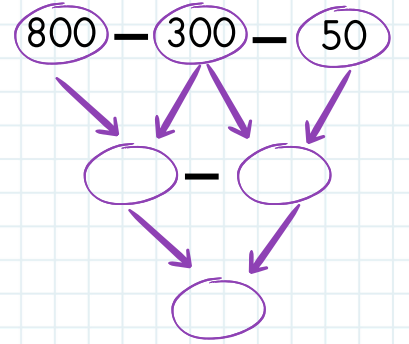
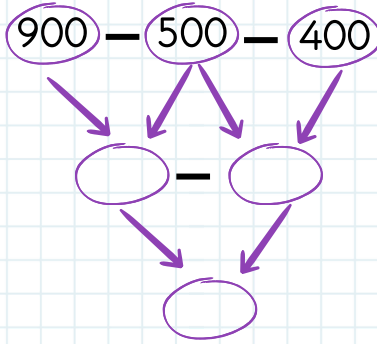
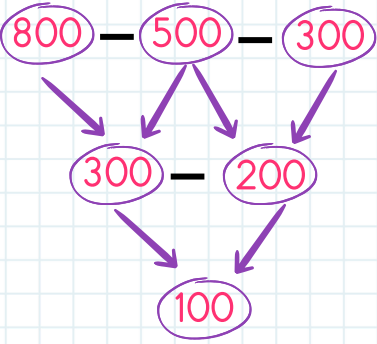
$$\begin{array}{r} 735 \\ - 300 \\ \hline \end{array}$$



$$\begin{array}{r} 535 \\ - 100 \\ \hline \end{array}$$



Aşağıdaki çıkarma işlemlerini örnekteki gibi yapalım.



 Aşağıdaki çıkarma işlemlerini zihinden yapalım.

1

$$\begin{array}{r} 950 \\ - 300 \\ \hline \end{array}$$

2

$$\begin{array}{r} 457 \\ - 200 \\ \hline \end{array}$$

3

$$\begin{array}{r} 590 \\ - 60 \\ \hline \end{array}$$

4

$$\begin{array}{r} 621 \\ - 400 \\ \hline \end{array}$$

5

$$\begin{array}{r} 875 \\ - 70 \\ \hline \end{array}$$

6

$$\begin{array}{r} 436 \\ - 90 \\ \hline \end{array}$$

7

$$\begin{array}{r} 887 \\ - 600 \\ \hline \end{array}$$

8

$$\begin{array}{r} 975 \\ - 500 \\ \hline \end{array}$$

9

$$\begin{array}{r} 803 \\ - 300 \\ \hline \end{array}$$

10

$$\begin{array}{r} 532 \\ - 80 \\ \hline \end{array}$$

11

$$\begin{array}{r} 725 \\ - 40 \\ \hline \end{array}$$

12

$$\begin{array}{r} 398 \\ - 200 \\ \hline \end{array}$$

13

$$\begin{array}{r} 624 \\ - 30 \\ \hline \end{array}$$

14

$$\begin{array}{r} 780 \\ - 600 \\ \hline \end{array}$$

15

$$\begin{array}{r} 298 \\ - 70 \\ \hline \end{array}$$

16

$$\begin{array}{r} 905 \\ - 800 \\ \hline \end{array}$$

17

$$\begin{array}{r} 589 \\ - 90 \\ \hline \end{array}$$

18

$$\begin{array}{r} 676 \\ - 80 \\ \hline \end{array}$$

19

$$\begin{array}{r} 979 \\ - 900 \\ \hline \end{array}$$

20

$$\begin{array}{r} 950 \\ - 60 \\ \hline \end{array}$$