


# TOPLAMA İŞLEMİ


Aşağıda modellenen toplama işlemlerini örnekteki gibi yapınız.



4

2


$$\begin{array}{r} 4 \\ + 2 \\ \hline 6 \end{array}$$



.....

.....


$$\begin{array}{r} ..... \\ + ..... \\ \hline ..... \end{array}$$



.....

.....


$$\begin{array}{r} ..... \\ + ..... \\ \hline ..... \end{array}$$



.....

.....


$$\begin{array}{r} ..... \\ + ..... \\ \hline ..... \end{array}$$



.....

.....


$$\begin{array}{r} ..... \\ + ..... \\ \hline ..... \end{array}$$



.....

.....


$$\begin{array}{r} ..... \\ + ..... \\ \hline ..... \end{array}$$



.....

.....

$$\begin{array}{r} ..... \\ + ..... \\ \hline ..... \end{array}$$



.....

.....

$$\begin{array}{r} ..... \\ + ..... \\ \hline ..... \end{array}$$

## TOPLAMA İŞLEMİ

Aşağıda verilen matematik cümlelerine uygun toplama işlemlerini yazınız.

\* 4 artı 1 eşittir 5

$$4 + 1 = 5$$

\* 3 artı 3 eşittir 6

$$... + ... = ...$$

\* 5 artı 4 eşittir 9

$$... + ... = ...$$

\* 7 artı 3 eşittir 10

$$... + ... = ...$$

\* 6 artı 6 eşittir 12

$$... + ... = ...$$

\* 8 artı 5 eşittir 13

$$... + ... = ...$$

\* 4 ile 3 'ün toplamı 7 eder.

$$4 + 3 = 7$$

\* 5 ile 5 'in toplamı ..... eder.

$$... + ... = ...$$

\* 7 ile 6 'nın toplamı ..... eder.

$$... + ... = ...$$

\* 8 ile 3 'ün toplamı ..... eder.

$$... + ... = ...$$

\* 9 ile 5 'in toplamı ..... eder.

$$... + ... = ...$$

\* 9 ile 9 'un toplamı ..... eder.

$$... + ... = ...$$

