
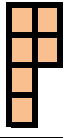
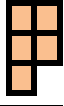




Aşağıda verilen toplama işlemlerini cevaplayalım.



 $\square + \square = \square$



 $\square + \square = \square$



 $\square + \square = \square$



 $\square + \square = \square$



 $\square + \square = \square$


 $\square + \square = \square$


 $\square + \square = \square$


 $\square + \square = \square$


 $\square + \square = \square$


 $\square + \square = \square$

Toplama işlemlerinin sonucunu eşleştirelim.

3+4	4
6+2	5
8+1	6
2+4	2
1+1	7
3+2	9
1+3	8

4 + 4	4
7 + 3	10
2 + 2	9
5 + 4	5
3 + 4	8
2 + 1	7
3 + 2	3