

# BİLSEM SINAVI

## SORU ÖRNEKLERİ



1.ve 2. SINIF

BU DENEME SINAVI BİLSEM SINAVLARININ SORU TİPLERİNE ÇOCUKLARIN  
AŞINALIK KAZANMASI İÇİN HAZIRLANMIŞTIR...

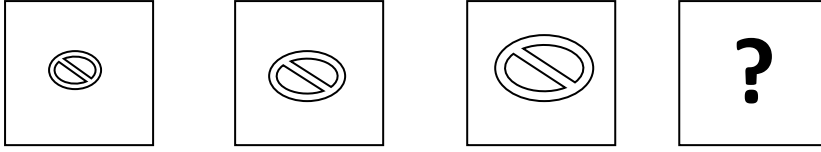
NUSRET SERT

PSİKOLOJİK DANIŞMAN

SABRİ DAŞO

PSİKOLOJİK DANIŞMAN

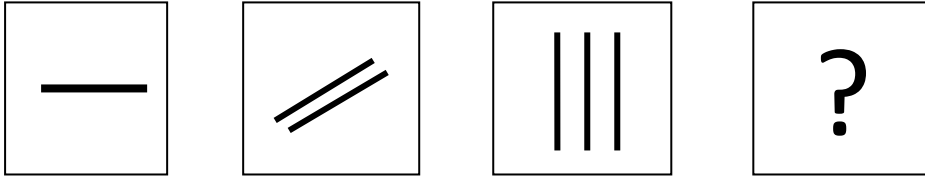
1.



Soru işareti yerine hangi seçenekteki şekil gelmelidir?

- A)
- B)
- C)
- D)

2.











Yukarıdaki şekilde soru işareti yerine hangi seçenekteki şekil gelmelidir?

- A)
- B)
- C)
- D)


3. Aşağıdaki şekillerin hangisinde nokta dairenin içinde ama karenin dışındadır?


- A)
- B)
- C)
- D)

4.


		
		
		?

Yandaki şekilde soru işareti yerine hangi şekil gelmelidir?

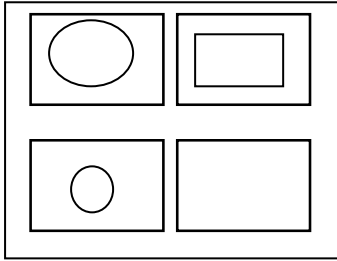
A) 

C) 


B) 


D) 

5.




Yandaki şekilde boş karenin içine hangi şekil gelmelidir?


A) 

C) 

B) 

D) 

6.



Yukarıdaki şekilde anlatılmak istenen kelime aşağıdakilerden hangisidir?


A) Fil

B) File

C) Filiz

D) Fil hortumu

7.



Yukarıdaki şekilde anlatılmak istenen kelime aşağıdakilerden hangisidir?

- A) Sıra
- B) Sarı
- C) Arı
- D) Darı

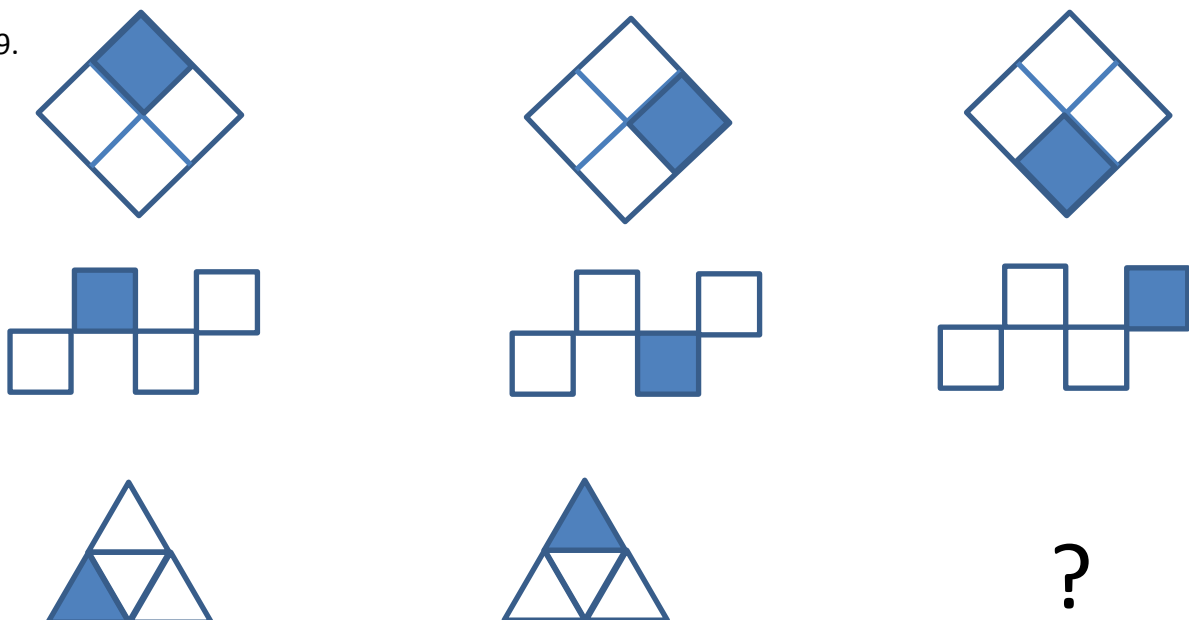
8.



Yukarıdaki şekilde anlatılmak istenen kelime aşağıdakilerden hangisidir?

- A) Deve
- B) Deveci
- C) Davet
- D) Devlet

9.



A)



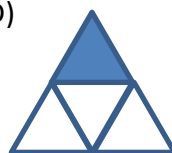
B)



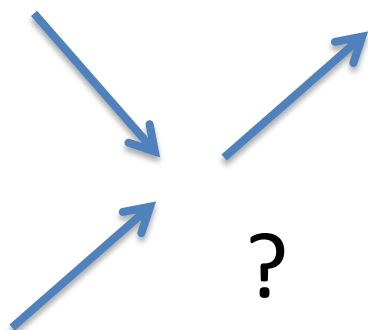
C)



D)



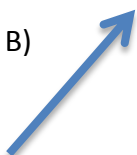
10.



A)



B)



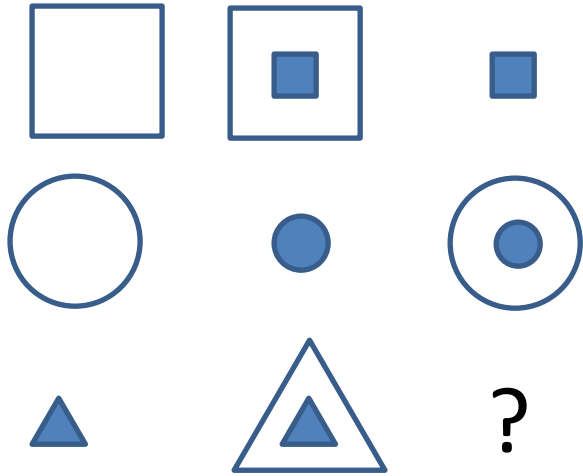
C)




D)



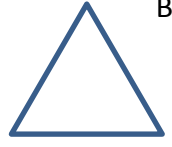
11.



A)



B)








C)



D)




12.




?

A)




B)



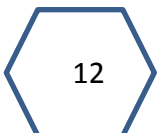
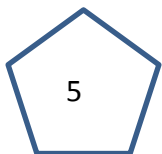
C)



D)



13.



? İşareti yerine aşağıdakilerden hangisi gelmelidir?

- A) 1
- B) 2
- C) 3
- D) 4

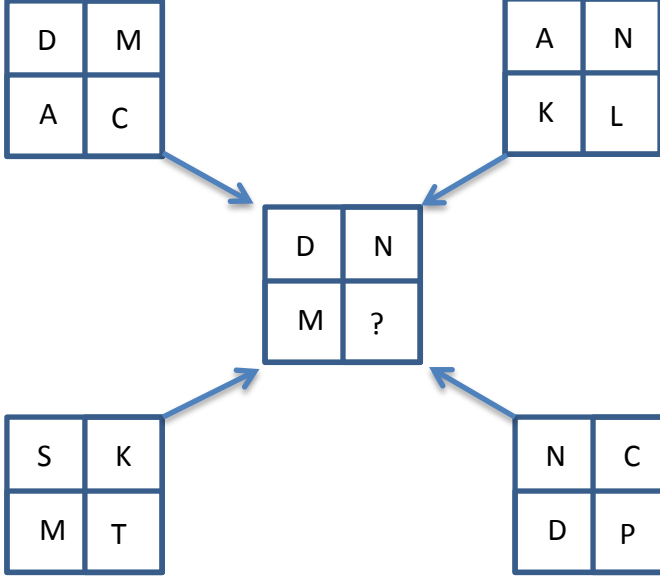
14.

**ÇORUM → MANİSA → ADIYAMAN → ?**

? İşareti yerine aşağıdakilerden hangisi gelmelidir?

- A) NEVŞEHİR
- B) ÇANKIRI
- C) DİYARBAKIR
- D) ANKARA

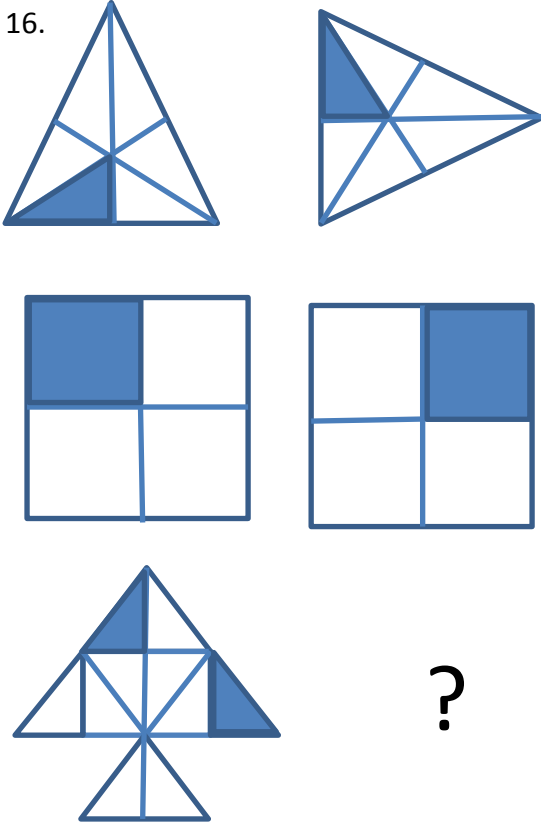
15.



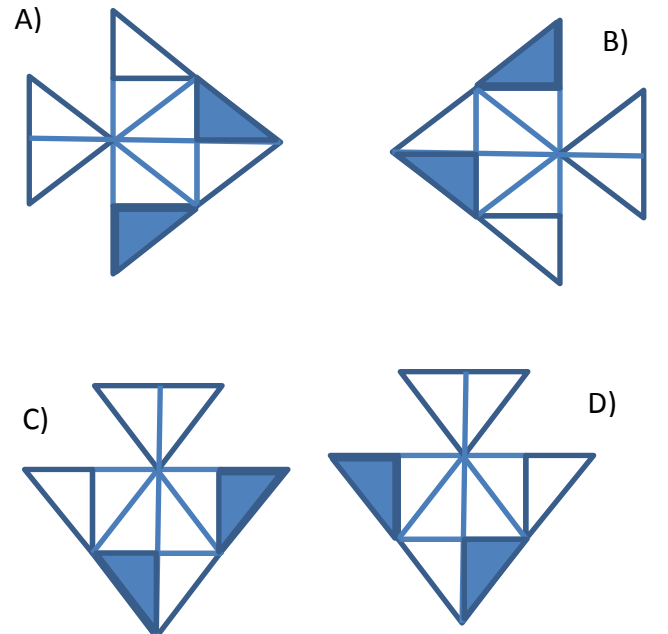
? İşareti yerine aşağıdakilerden hangisi gelmelidir?

- A) D
- B) N
- C) C
- D) P

16.



? İşareti yerine aşağıdakilerden hangisi gelmelidir?



17.



?



A)



B)



C)



D)



18.

2	5
3	7

3	2
7	5

7	3
5	2

?

A)

7	5
2	3

B)

7	3
2	5

C)

3	7
5	2

D)

5	7
2	3

19.

O → C

E → F

B → ?

? İşareti yerine aşağıdakilerden hangisi gelmelidir?

E) D







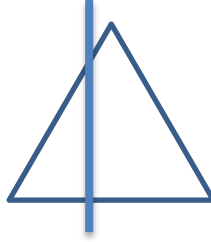

F) R

G) P

H) G



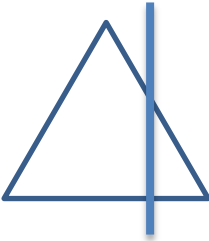
20.




?

Yukarıda ? işareti yerine aşağıdakilerden hangisi gelmelidir?

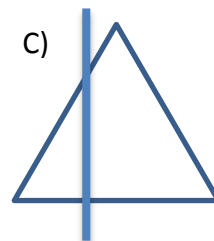
A)




B)





C)



D)




21.




?


A)




B)




C)



D)



22.




?


A)




B)



C)



D)



SİZLERİ TEKNO REHBERLİK GRUBUNA  
BEKLERİZ...

<https://www.facebook.com/groups/TeknoRehberlik/>