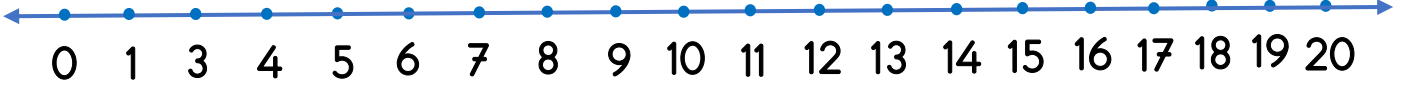
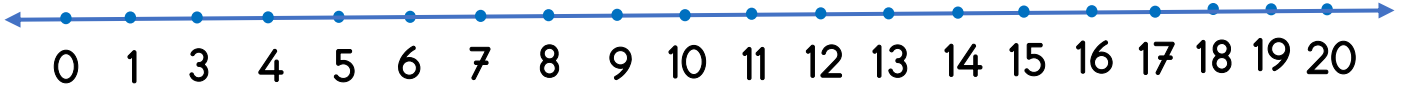


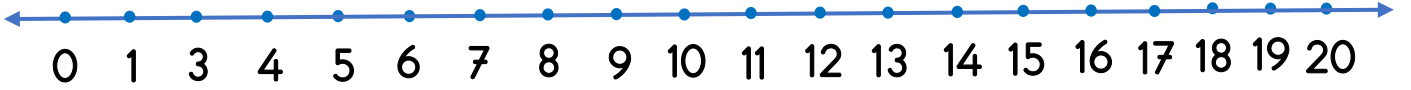
Yönerge: Verilen işlemleri sayı doğrusunda gösteriniz.



$$5 + 7 = \square$$



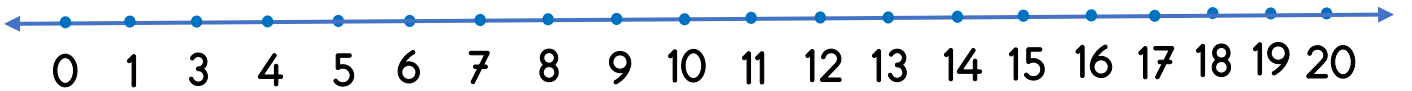
$$13 - 8 = \square$$



$$4 + 9 = \square$$



$$17 - 9 = \square$$



$$8 + 3 = \square$$