

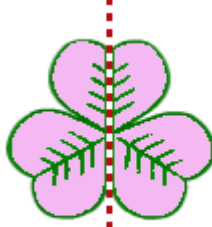
## SİMETRİ

İki eş parçaya ayrılabilen şekillere **simetrik şekiller** denir.

Simetrik şekilleri iki eş parçaya ayıran doğrulara **simetri doğrusu** denir.



Simetrik şekil



Simetri doğrusu



Eş parça

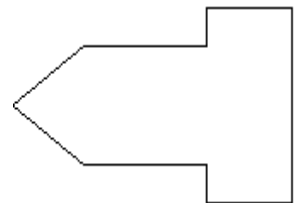
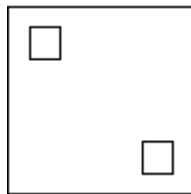
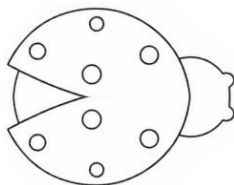
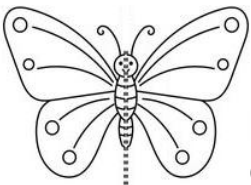
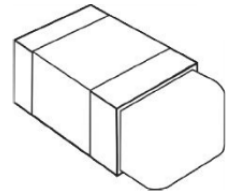
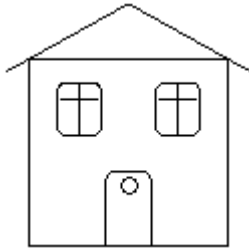


Eş parça

A - İki eş parçaya ayrılabilen şekilleri işaretleyiniz.



B - Aşağıdaki şekillere simetri doğrusu çiziniz. Eş parçalardan birini boyayınız.



C - Aşağıdaki şekillerden simetri doğrusu olmayanlara ( Y ) , simetri doğrusu olanlara ( V ) , yazınız.



[ ]



[ ]



[ ]



[ ]



[ ]



[ ]



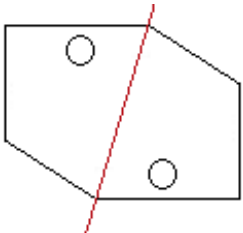
[ ]



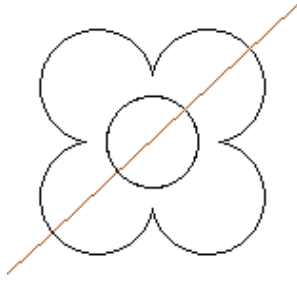
[ ]



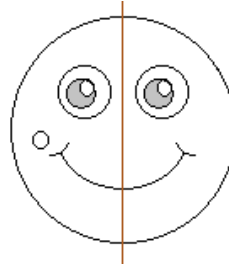
D - Aşağıdaki şekillerden hangileri çizgilerinden katlanırsa iki eş parçaya ayrılır ? İşaretleyiniz.



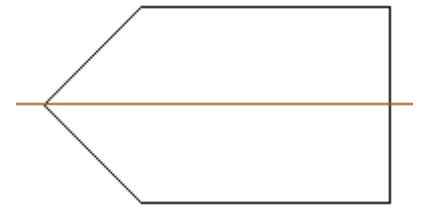
[ ]



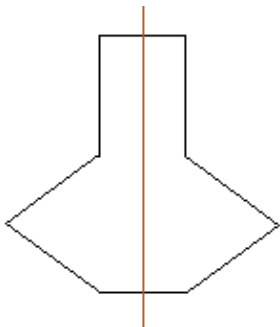
[ ]



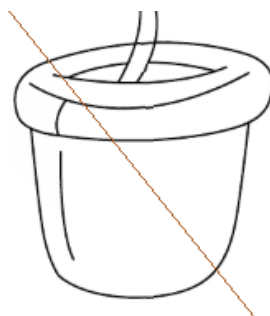
[ ]




[ ]



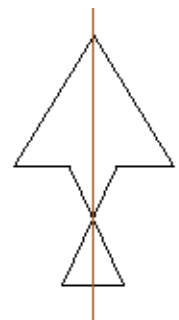
[ ]



[ ]



[ ]



[ ]

## ETKİNLİK

Aşağıdaki harf ve rakamlardan simetrik olanları simetri doğrusu ile bölerek bir parçasını boyayınız.

A

1

E

F

D

G

2

H

3

L

M

4

P

5

8

S

V

9

Y

Z

## ETKİNLİK

Aşağıda kareli zeminde verilen şekillerin simetriğini çiziniz.

